



Coimisiún na Scrúduithe Stáit
State Examinations Commission

Junior Certificate Examination, 2012

Mathematics (Project Maths – Phase 2)

Paper 1

Higher Level

Friday 8 June Afternoon 2:00 to 4:30
300 marks

Examination number

Centre stamp

Running total

For examiner

Question	Mark	Question	Mark
1		11	
2		12	
3		13	
4		14	
5			
6			
7			
8			
9			
10		Total	

Grade

Instructions

There are 14 questions on this examination paper. Answer **all** questions.

Questions do not necessarily carry equal marks. To help you manage your time during this examination, a maximum time for each question is suggested. If you remain within these times you should have about 10 minutes left to review your work.

Question 14 carries a total of 50 marks.

Write your answers in the spaces provided in this booklet. There is space for extra work at the back of the booklet. You may also ask the superintendent for more paper. Label any extra work clearly with the question number and part.

The superintendent will give you a copy of the booklet of *Formulae and Tables*. You must return it at the end of the examination. You are not allowed to bring your own copy into the examination.

Marks will be lost if all necessary work is not clearly shown.

Answers should include the appropriate units of measurement, where relevant.

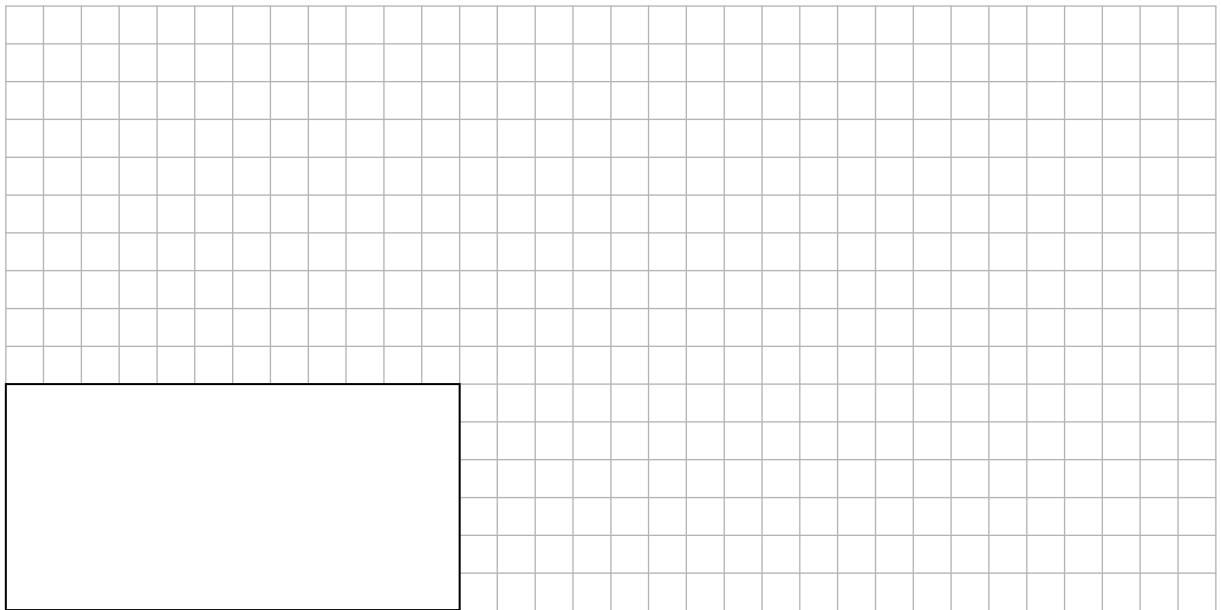
Answers should be given in simplest form, where relevant.

Write the make and model of your calculator(s) here:

Question 2

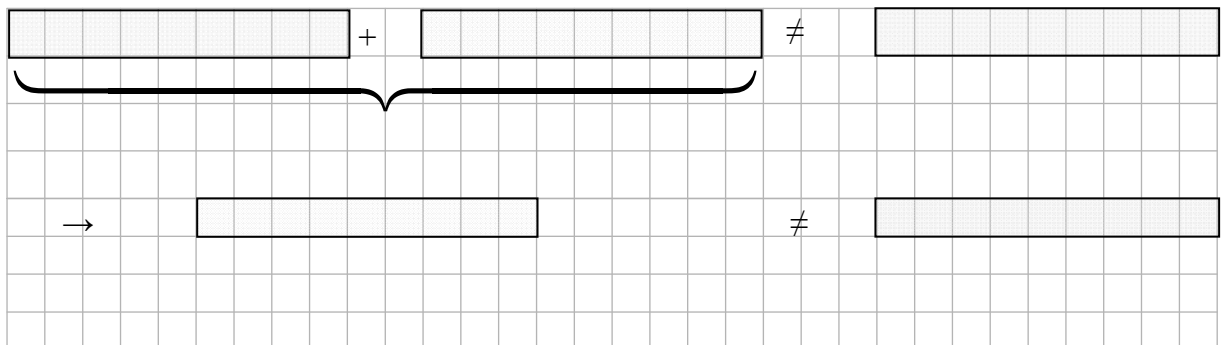
(Suggested maximum time: 5 minutes)

- (a) The diagram below shows three fifths of a rectangle. Complete the rectangle on the grid.



- (b) By shading appropriate sections of the strips below, show that

$$\frac{1}{3} + \frac{2}{6} \neq \frac{3}{9}$$



(b) At the end of the following season a larger total bonus was paid. At that time, John said: “The bonus should be paid according to the number of goals scored by the striker. Paul scored 50% more goals than Michael. I scored as many as both of them together. I would get €140 000 if the team used this method.”

(i) Calculate the total bonus on offer that season.

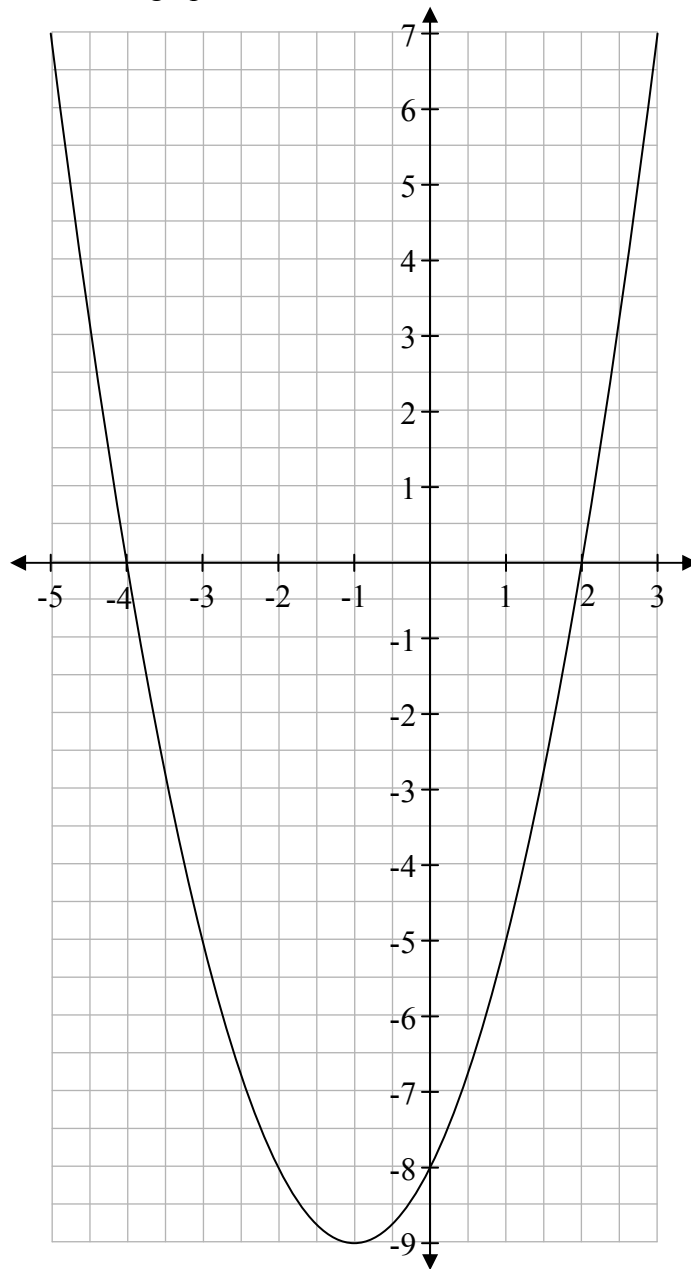
(ii) How much each would Paul and Michael get under John’s system?

Page	Running
------	---------

Question 6


(Suggested maximum time: 15 minutes)

A group of four students is studying graphs of functions of the form $f : x \mapsto x^2 + 2x + k$, $x \in \mathbb{R}$. Each takes an integer value of k and draws the graph of their function in a suitable domain. Maria took $k = -8$ and drew the graph below.




(a) Use the graph to write down the roots of the equation $x^2 + 2x - 8 = 0$.

- (b) Keith's graph passes through the point (3, 2). Find the value of k that Keith used.




- (c) On Alice's graph, the two roots of the function are the same. Find the value of k that Alice used.



- (d) Draw a sketch of Alice's function on the diagram shown in part (a).

page	running
------	---------


- (e) Emma's graph shows that the roots of her function are -5 and 3 .
Find the value of k that she used.



Question 7


(Suggested maximum time: 20 minutes)

Lisa is on a particular payment plan called "Plan A" for her electricity. She pays a standing charge each month even if no electricity is used. She also pays a rate per unit used. The table shows the cost, including the standing charge, of using different amounts of units, in a month.




Units Used	Plan A Cost in euro
100	38
200	56
300	74
400	92
500	110
600	128
700	146
800	164


- (a) Use the data in the table to show that the relationship between the number of units used and the cost is linear.



- (e) Write down a formula to represent the relationship between the number of units used and the cost for any given number of units.



- (f) The table above does not include VAT. One month Lisa used 650 units. Her total bill for that month, including VAT, was €155.50. Find the VAT rate on electricity, correct to one decimal place.



- (g) Lisa is offered a new plan, “Plan B”, where the standing charge is €36 and the rate per unit used is 15.5 cent. Complete the following table for Plan B.

Units Used	Plan B Cost in euro
100	
200	
300	
400	
500	
600	
700	
800	

- (h) Which plan do you think Lisa should choose? Give a reason for your answer.

- (i) On your diagram for part (b), draw a graph to show the relationship between the number of units used and the cost of electricity for Plan B. Label this graph “Plan B”.
- (j) Use your diagram to find the number of units for which both plans have the same cost.

Question 8**(Suggested maximum time: 5 minutes)**

A capacitor is a device which stores electricity. The formula $W = \frac{1}{2}CV^2$ gives the energy stored in the capacitor, where W is the energy, C is the capacitance and V is the voltage, and standard units are used throughout.

- (a) Find the amount of energy stored in a capacitor when $C = 2500$ and $V = 32$.

- (b) Write V in terms of W and C .

Question 9

(Suggested maximum time: 10 minutes)

Consideration is being given to changing the number of points a team gets for a win and also the number of points a team gets for a draw in a soccer league. No points will be awarded for a loss. The table below shows the standing of two teams after six games under the proposed new system.

Team	Played	Won	Drawn	Lost	Points (new system)
Team A	6	2	2	2	12
Team B	6	1	5	0	10

- (a) Find the number of points which would be awarded for (i) a win and (ii) a draw under this proposed system.


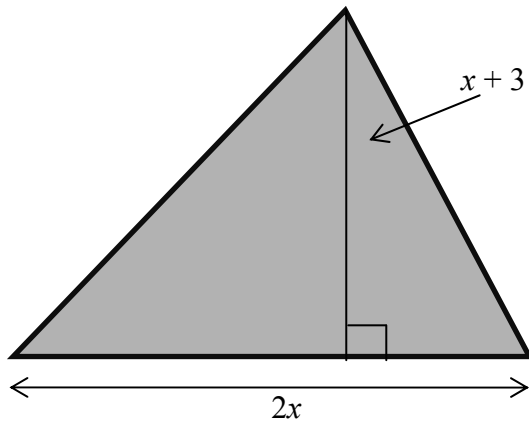
- (b) The current system awards 3 points for a win and 1 point for a draw. Suggest one reason why it might be preferable to change to the system proposed in part (a).

Page	Running
------	---------


Question 10

(Suggested maximum time: 5 minutes)


A triangle has a base length of $2x$ cm and a perpendicular height of $(x + 3)$ cm.
The area of the triangle is 10 cm^2 . Find the distance x .




(ii) $8x^2 - 14x + 3 = 0$




(iii) $\frac{2x+5}{3} - \frac{4x-1}{2} = -\frac{1}{2}$




- (b) Find the roots of the equation $2x^2 - 7x - 6 = 0$.
Give your answers correct to two decimal places.



You may use this page for extra work.



page	running
------	---------



Junior Certificate 2012 – Higher Level

Mathematics (Project Maths – Phase 2) – Paper 1

Friday 8 June

Afternoon 2:00 to 4:30